

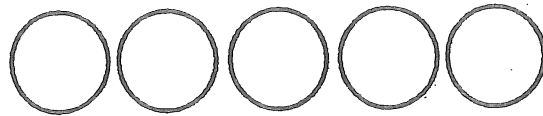


Name: \_\_\_\_\_

- ★ 1. Jill and five friends are having a party. Each person wants 2 cupcakes. How many cupcakes will they need?

Answer: \_\_\_\_\_ cupcakes

- ★★★ 2. Below are 5 coins with the faces covered up. The coins are worth 42¢ in all. What coins are they? Write the value in cents on each coin.



- ★★ 3. March has 31 days. If March 1 is a Thursday, what day of the week is the last day of the month?

Answer: \_\_\_\_\_

MARCH						
Sun	Mon	Tue	Wed	Thu	Fri	Sat

- ★ 4. The Kindergarten had 24 children, then four more joined the class. The first grade had 23 children, then six more joined the class. Which class has more children now?

Answer: \_\_\_\_\_


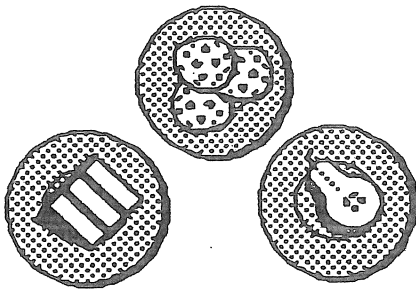
- ★★ 5. How many squares are in the picture of the house?

Answer: \_\_\_\_\_



- ★★★ 6. You are planning a party. You want to fit as many plates of dessert on the table as you can. About how many of the plates would fit?

Answer: \_\_\_\_\_ plates



- ★★ 7. If you and two friends wanted to each build a car like this, how many car wheels would you need?

Answer: \_\_\_\_\_

How many tin cans would you need for lights?

Answer: \_\_\_\_\_

