




Name: _____

★★★★ 1. The dog ate 9 flies. The cat ate 3 more flies than the dog. The bird ate 2 more flies than the cat.

How many flies did the bird eat? _____

How many flies did all three animals eat? _____



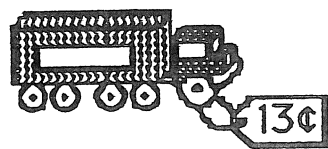
★★ 2. How many legs are on 5 lambs?

Answer: _____ legs

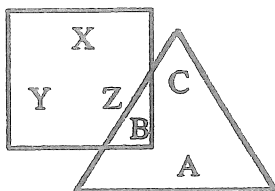


★★★ 3. How many trucks can you buy for 30¢?

Answer: _____ trucks



- ★ 4. Which letters are in the triangle?



Answer: _____

- ★★★ 5. I have 4 tens. My ones digit is 2 more than my tens digit. What number am I?

Answer: _____

- ★★ 6. Put a + or - in each circle to make a true sentence.

$$13 \quad \bigcirc \quad 4 \quad \bigcirc \quad 8 = 17$$

- ★★ 7. Tom has half as many pennies as Sue. Sue has 20 pennies. How many pennies does Tom have?

Answer: _____ pennies

